



11 + Practice Papers

*Give your child the best!*



11 + Practice Papers

*Give your child the best!*

**11+ NON-VERBAL**  
**REASONING QUESTIONS**

**TYPE 5**  
**IN COMMON (b)**

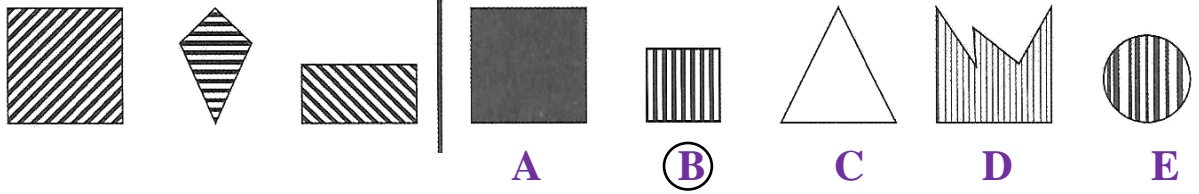
**Created by:**

**11practicepapers.co.uk**

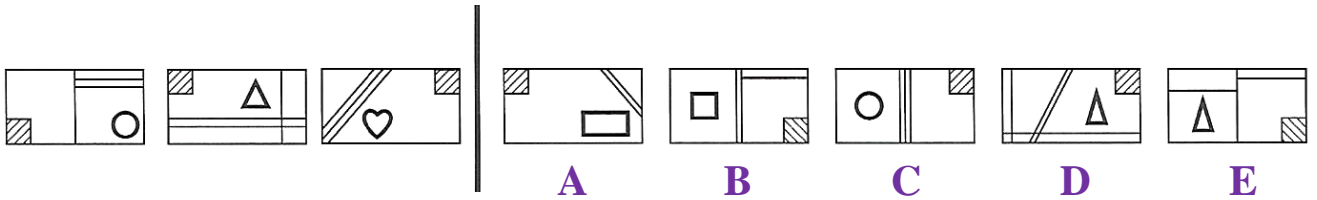
# TYPE - 5 IN COMMON (b)

The three figures on the left are similar in some way.  
Decide which figure is most similar to the three on the left and circle the letter below it.

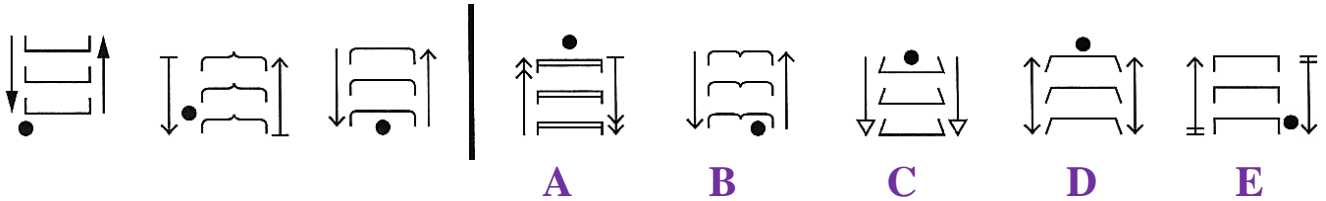
**EXAMPLE**



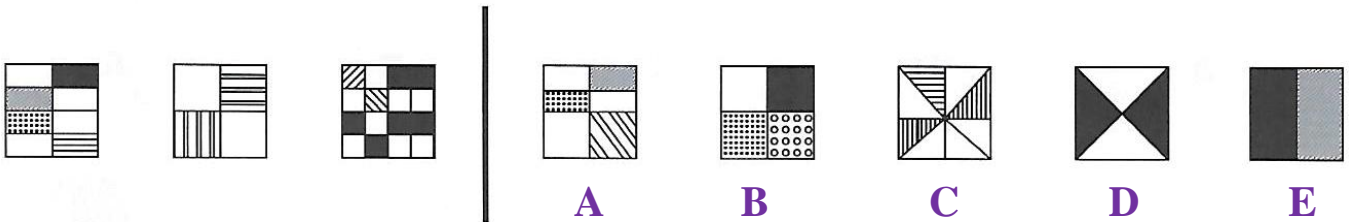
**(1)**



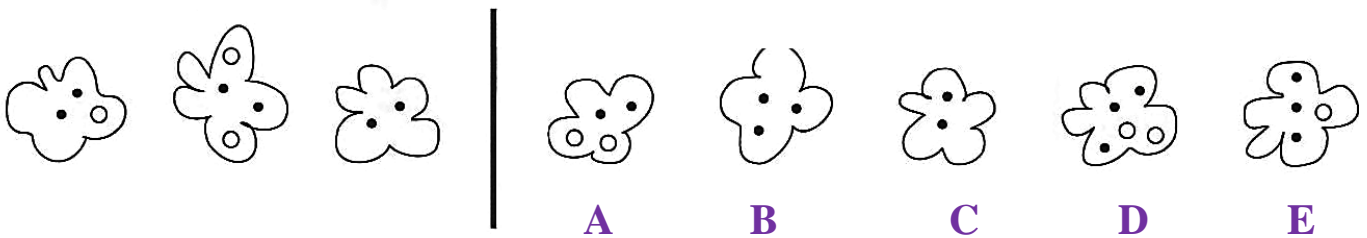
**(2)**



**(3)**



**(4)**



# TYPE - 5 IN COMMON (b)



<u>Question No.</u>	<u>ANSWERS</u>	<u>Mark (s)</u>
1.	C Each figure on the left consists of a rectangle containing a small bold shape, three fine lines and a small square with diagonal shading running from bottom left to top right. <b>Therefore, the answer is C.</b>	1
2.	B Each figure on the left consists of three identical bracket shapes, with a downward-pointing arrow on the left and a matching upward-pointing arrow on the right. Each figure has a small black dot. <b>Therefore, the answer is B.</b>	1
3.	D Each figure on the left consists of a square divided into equal sections, with exactly half the sections shaded. <b>Therefore, the answer is D.</b>	1
4.	C Each figure on the left consists of a five scalloped loop with two black dots inside. <b>Therefore, the answer is C.</b>	1