



11 + Practice Papers

*Give your child the best!*



11 + Practice Papers

*Give your child the best!*

# 11+ NON-VERBAL REASONING QUESTIONS

## TYPE 1 (ANALOGIES) FREE SAMPLE

Created by:

[11practicepapers.co.uk](http://11practicepapers.co.uk)

# TYPE - 1 (ANALOGIES)

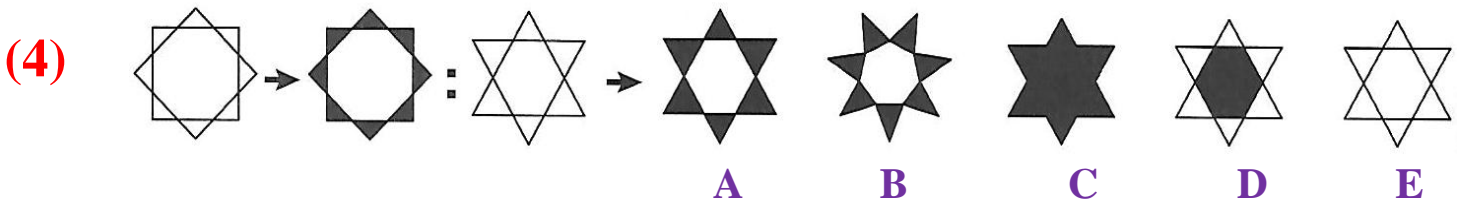
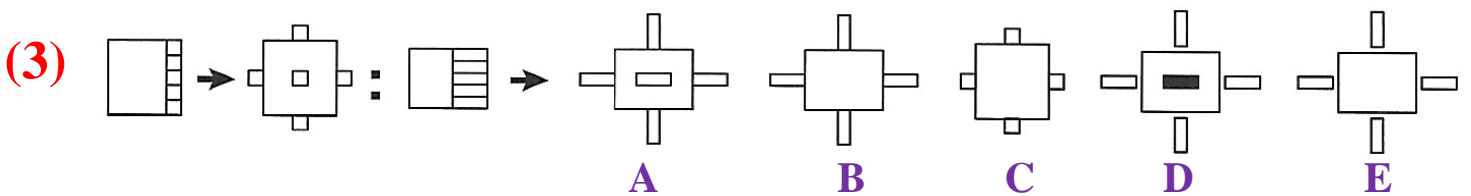
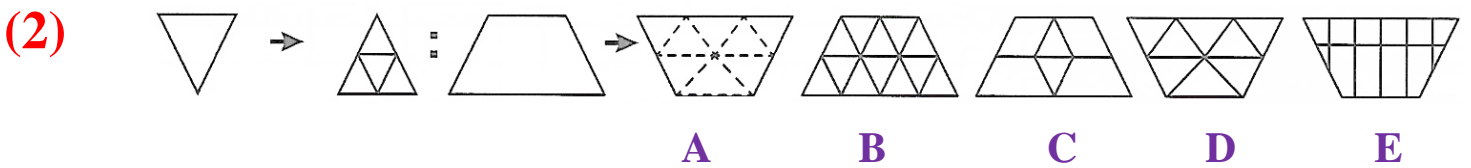
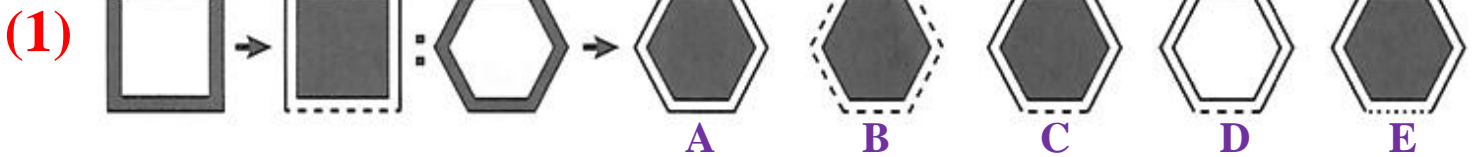
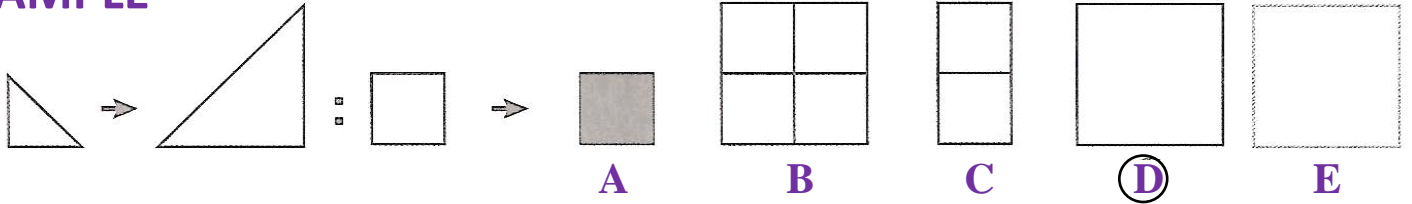


There are two figures on the left with an arrow between them. Decide how the second figure is related to the first.

There is then a third figure followed by an arrow and five more figures.

Decide which figure is related to the third figure in the same way as the first two figures are related. Circle the letter below it.

## EXAMPLE



# TYPE - 1 (ANALOGIES)



<u>Question No.</u>	<u>ANSWERS</u>	<u>Mark(s)</u>
<b>1.</b>	<b>C</b> Moving from left to right, the shape alters so that the outer horizontal lines become dashed. The black shading moves to the centre of the shape. Therefore, the answer is C	<b>1</b>
<b>2.</b>	<b>D</b> Moving from left to right, the shape is rotated 180° and filled with triangles. Therefore, the answer is D	<b>1</b>
<b>3.</b>	<b>A</b> Moving from left to right, the small shapes move to the outside and middle of the large shape. Therefore, the answer is A.	<b>1</b>
<b>4.</b>	<b>A</b> Moving from left to right, the triangles at the edge of the shape are shaded black. Therefore, the answer is A.	<b>1</b>